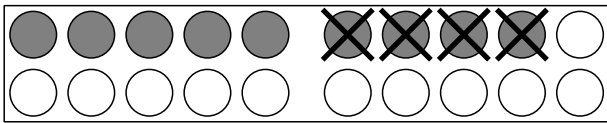
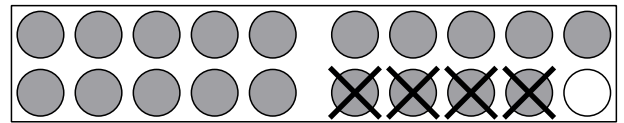


Name: _____

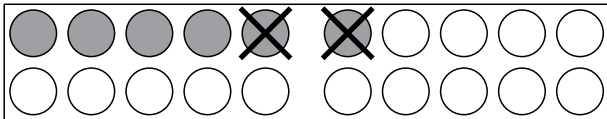
Datum: _____



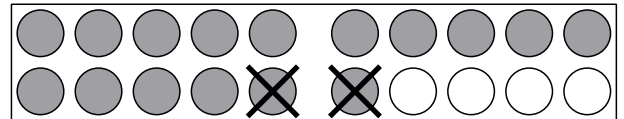
$$\square \bigcirc \square \bigcirc \square$$



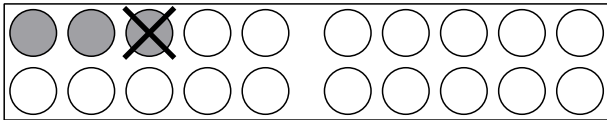
$$\square \bigcirc \square \bigcirc \square$$



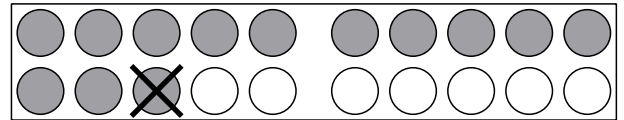
$$\square \bigcirc \square \bigcirc \square$$



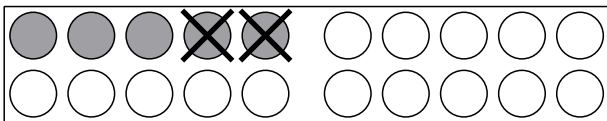
$$\square \bigcirc \square \bigcirc \square$$



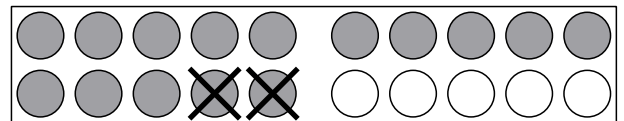
$$\square \bigcirc \square \bigcirc \square$$



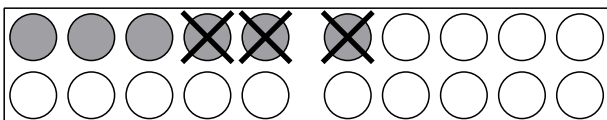
$$\square \bigcirc \square \bigcirc \square$$



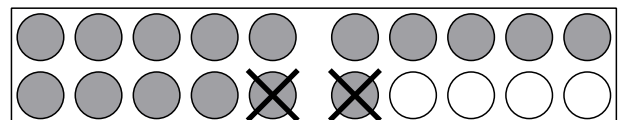
$$\square \bigcirc \square \bigcirc \square$$



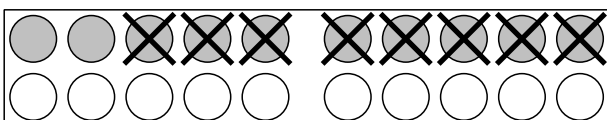
$$\square \bigcirc \square \bigcirc \square$$



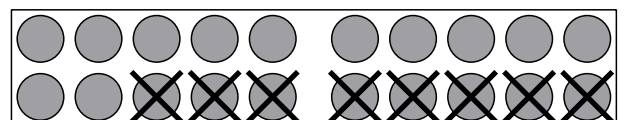
$$\square \bigcirc \square \bigcirc \square$$



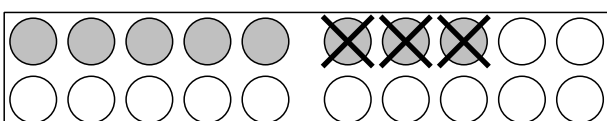
$$\square \bigcirc \square \bigcirc \square$$



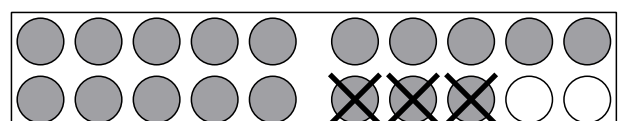
$$\underline{\quad} - \underline{\quad} = \underline{\quad}$$



$$\square \bigcirc \square \bigcirc \square$$



$$\underline{\quad} - \underline{\quad} = \underline{\quad}$$

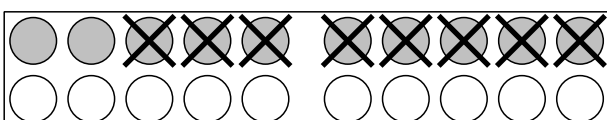
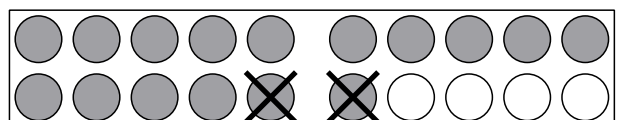
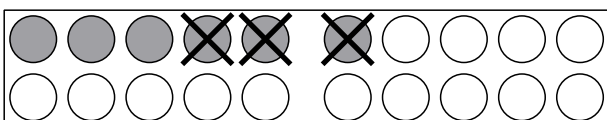
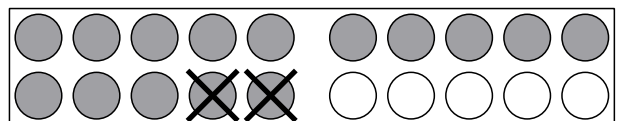
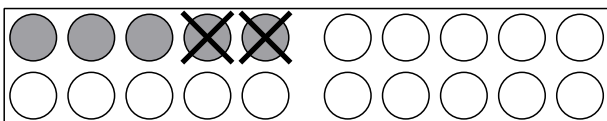
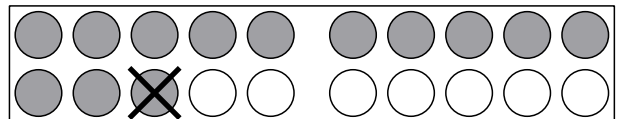
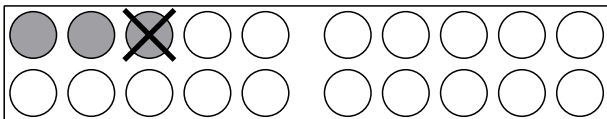
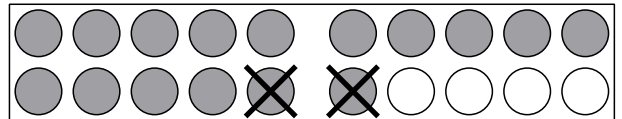
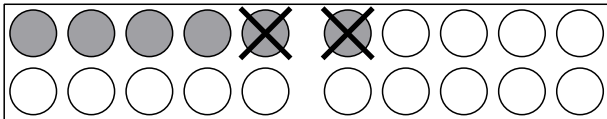
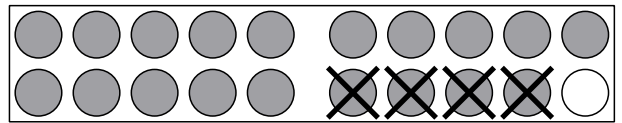
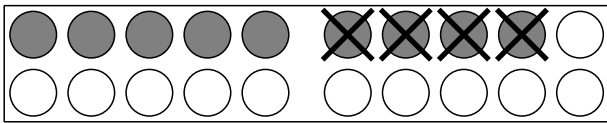


$$\square \bigcirc \square \bigcirc \square$$

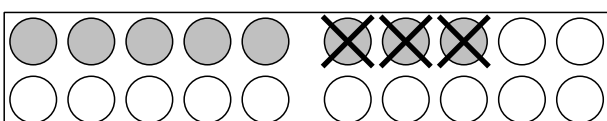
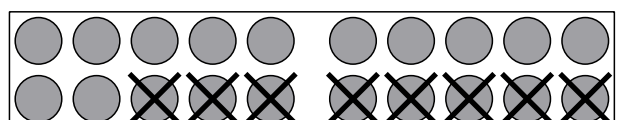
Schreibe die Minusaufgabe dazu und rechne.

Name: _____

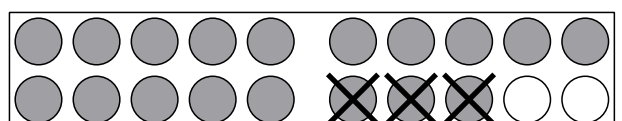
Datum: _____



 10 - 8 = 2



 8 - 3 = 5



Schreibe die Minusaufgabe dazu und rechne.